

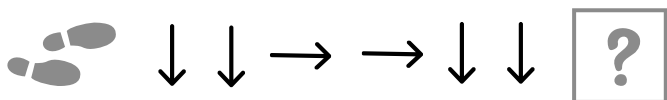
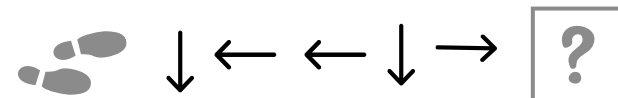
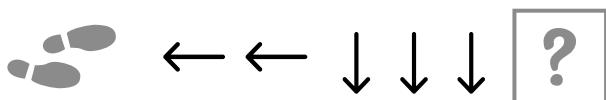
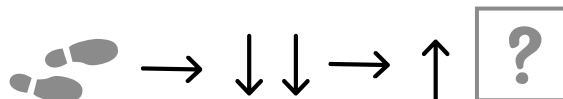
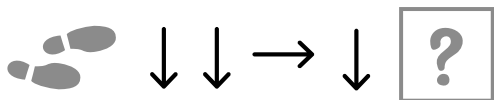
PROCHÁZKA MĚSTEM



Dodržuj pokyny a zjisti místa kam chlapeček dojde.

Jedna šipka vždy odpovídá jednomu čtverečku.

Říkej směry kudy chlapeček jde (dolů, nahoru, doprava, doleva).



Mgr. Bc. Ivana Kratochvílová

